


CHALLENGE WARM-UP!

Four Straight Lines

Make a square with 9 dots as shown. Cross all the dots with 4 straight lines without taking your pencil off the paper.



Sep 25-7:26 AM

ASSESSMENT ALERT

Sep 25-7:37 AM

$$|3t + 6| = 9 \text{ POSITIVE}$$

$$\begin{array}{r} -6 \quad -6 \\ \hline 3t = 3 \end{array}$$

$$\frac{3}{3} \quad \frac{3}{3}$$

$$t = 1$$

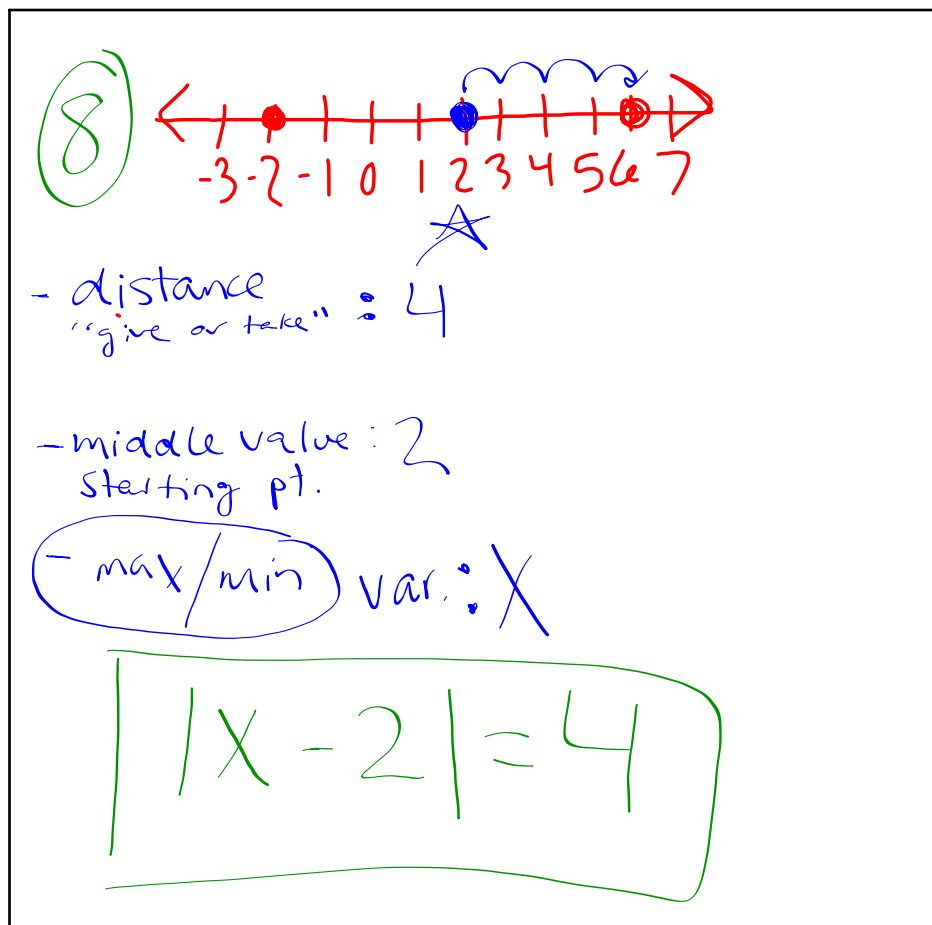
$$3t + 6 = -9 \text{ NEG.}$$

$$\begin{array}{r} +6 \quad -6 \\ \hline 3t = -15 \end{array}$$

$$\frac{3}{3} \quad \frac{-15}{3}$$


$$t = -5$$

Sep 25-8:57 AM



Sep 25-7:40 AM

1.2°F
 28°F
max/min?



$|x - 28| = 1.2$

$x - 28 = 1.2$ | $x - 28 = -1.2$

Sep 25-1:26 PM